

①

James : Thomas : Kieran

2 : 3 : 5

:

Thomas's share is £9
How much did they each get?

②

James : Emma : Charlotte

12 : 5 : 8

:

Emma's share is £200
How much was shared altogether?

③

Harry : Nasim : Charlotte

4 : 3 : 5

:

£60 is shared between them
How much did each one get?

④

Harry : Emma : Michael

12 : 5 : 8

:

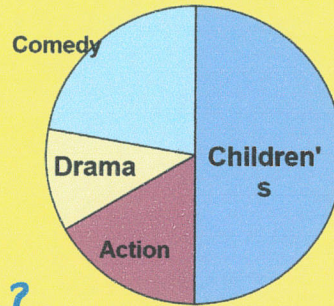
£1500 is shared between them
How much did each get?

1

Ed collected some data on the types of DVD rented from a shop one day.

The pie chart shows the types of DVD rented from a shop one day and the angle, °

| Type | Angle, ° |
|------------|----------|
| Children's | 180 |
| Action | 60 |
| Drama | 40 |
| Comedy | 80 |



Values on Values off

Show pie chart

Hide pie chart

Show 1st

Hide all

New f % New f °

New ° % New ° f

New % ° New % f

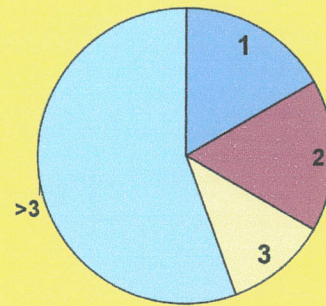
There were 90 DVD's rented in total. How many of each type?

2

Charlotte collected some data on the number of pets that a sample of pupils have.

The pie chart shows the number of pets that a sample of pupils have and the frequency

| No. of pets | Frequency | Angle, ° |
|-------------|-----------|----------|
| 1 | 6 | 60 |
| 2 | 6 | |
| 3 | 4 | 40 |
| >3 | | |



Values on Values off

Show pie chart

Hide pie chart

Show 1st

Hide all

New f % New f °

New ° % New ° f

New % ° New % f

How many pupils had more than 3 pets?

3

Hollie collected some data on the favourite lessons of a sample of pupils.

| Fav lesson | Percentage | Angle, ° |
|------------|------------|----------|
| Maths | 50 | |
| English | 25 | |
| Science | 20 | |
| Other | 5 | |
| Total | 100 | |

Values on Values off

Show pie chart

Hide pie chart

Show 1st

Hide all

New f % New f °

New ° % New ° f

New % ° New % f

Draw the pie graph for this data

Calculator Show all

6. Olivia prepares the ingredients for pizzas.



She uses cheese, topping and dough in the ratio 2 : 3 : 5
 Olivia uses 70 grams of dough.

Work out the number of grams of cheese and the number of grams of topping Olivia uses.

Cheese g Topping g
 (Total 3 marks)

- 7.

**Canal boat for hire
 £1785.00
 for 14 days**

Jenny and Kath hire the canal boat for 14 days.
 They share the hire cost of £1785.00 in the ratio 2:3

Work out the smaller share.

£
 (Total 2 marks)

8. £90 is shared between Ron and Hermione in the ratio 5 : 1.

Hermione thinks she should get £18 but Ron thinks she should get £3 less.
 Explain who is correct, giving a reason for your answer.

.....

(Total 2 marks)

9. Amy, Beth and Colin share 36 sweets in the ratio 2 : 3 : 4

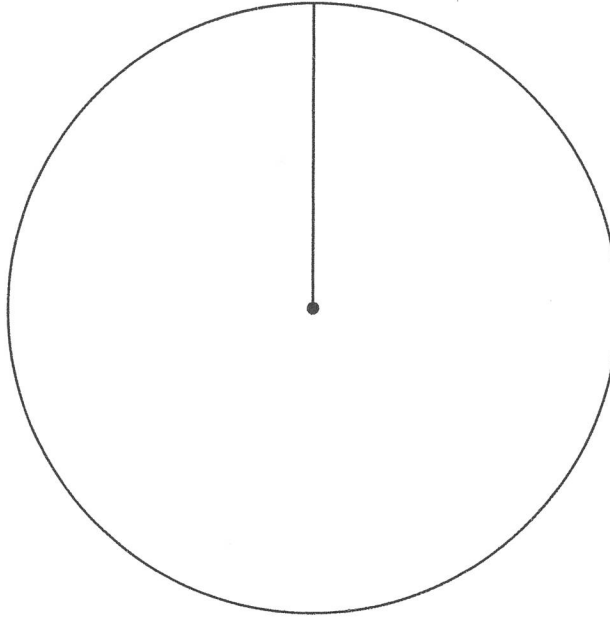
Work out the number of sweets that each of them receives.

Amy.....sweets Beth.....sweets Colin.....sweets
 (Total 3 marks)

1. Sam recorded the colours of cars parked at his school yesterday. The table shows his results.

| Colour | Frequency | |
|--------|-----------|--|
| Blue | 20 | |
| Red | 22 | |
| Green | 6 | |
| White | 12 | |

Complete an accurate pie chart to show this information.

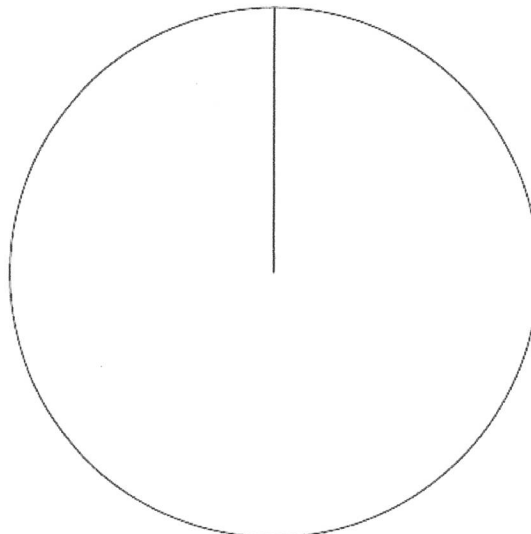


(Total 4 marks)

2. The table gives information about the medals won by Austria in the 2002 Winter Olympic Games.

| Medal | Frequency | |
|--------|-----------|--|
| Gold | 3 | |
| Silver | 4 | |
| Bronze | 11 | |

Draw an accurate pie chart to show this information



(Total 4 marks)